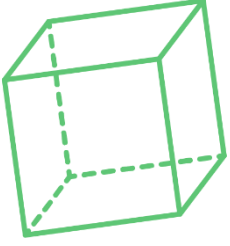


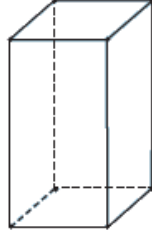
GEOMETRİK CİSİMLER



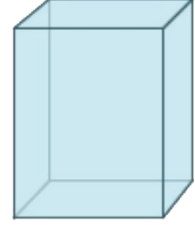
Aşağıdaki geometrik cisimlerin adlarını noktalı yerlere yazınız.




.....



.....



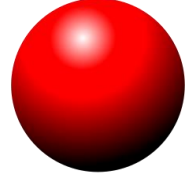
.....



.....






.....



.....



Aşağıdaki nesnelerin hangi geometrik cisme benzedikleri altlarına yazınız.





Aşağıdaki şekillerin yanlarına istenilen bilgileri yazınız.

Geometrik Cisim	Adı	Köşe Sayısı	Ayrıt Sayısı	Yüz Sayısı
