





Nesneleri Kilogram Cinsinden Tartma

⇒ Aşağıdaki görsellerde verilen ürünlerden kilogram ile alınanları işaretleyiniz.



☐

☐

☐

☐

☐

☐

☐

☐


⇒ Aşağıda verilen ağırlıkları "hafiften ağıra doğru" ve "ağırdan hafife doğru" sıralayınız.



10 kg



6 kg




13 kg



8 kg

Ağırdan hafife doğru:


Hafiften ağıra doğru:



2 kg



14 kg



7 kg



22 kg

Ağırdan hafife doğru:

Hafiften ağıra doğru: