

Adım Soyadım:

Sınıfım:

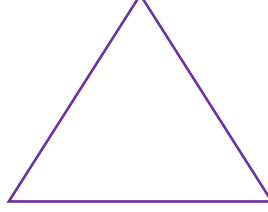
Numaram:

GEOMETRİK ŞEKİLLERİN KÖŞE SAYILARI


1. Aşağıdaki şekillerin köşe sayılarını yazınız.



.....



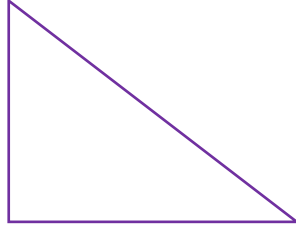
.....



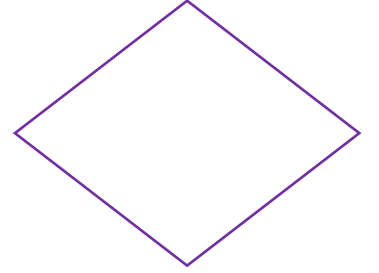
.....



.....




.....




.....



.....



.....



.....

2. Aşağıda ismi verilen şekillere farklı örnekler çiziniz.

Kare:

Dikdörtgen:

Üçgen:

Çember: