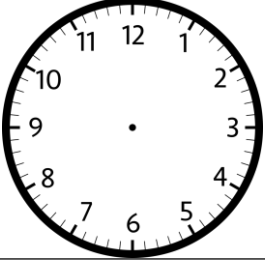




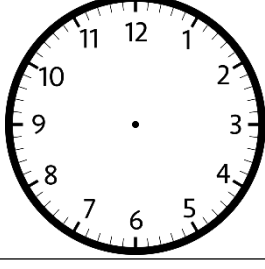
SAAT KAÇ ?



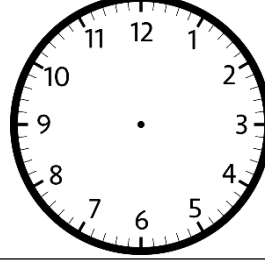
➤ Alt tarafta verilen saatlerin okunuşlarına göre saatlere akrep ve yelkovanları çiziniz.



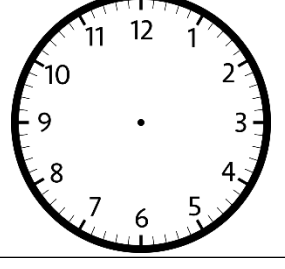
Saat 5'i çeyrek geçiyor



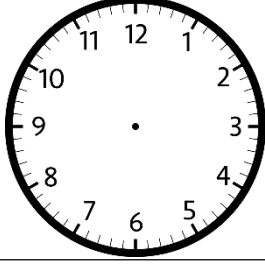
Saat 7 buçuk



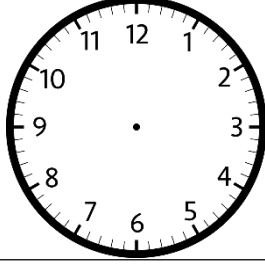
Saat 9'a çeyrek var



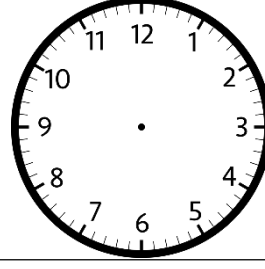
Saat 1'i çeyrek geçiyor



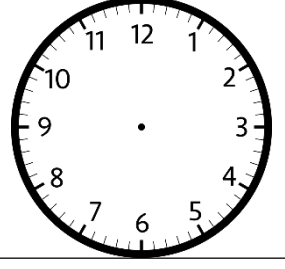
Saat 4 buçuk



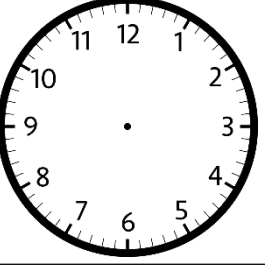
Saat 8'i çeyrek geçiyor



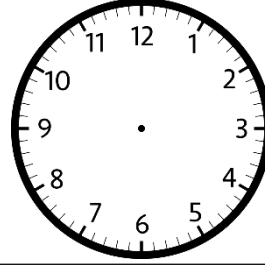
Saat 7'ye çeyrek var



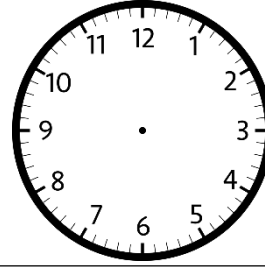
Saat 12 buçuk



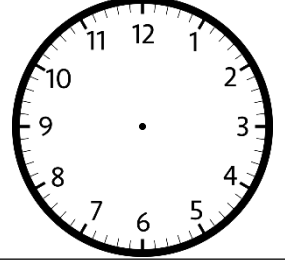
Saat 4'ü çeyrek geçiyor



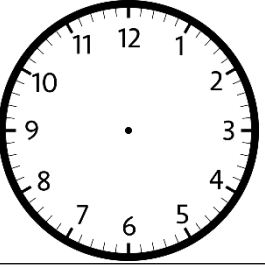
Saat 8'e çeyrek var



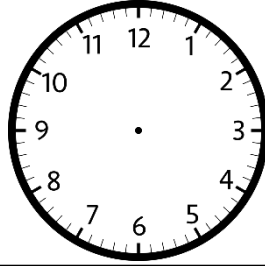
Saat 3'e çeyrek var



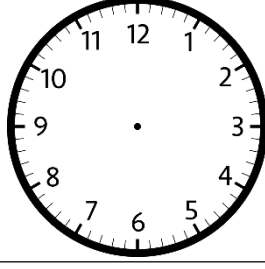
Saat 2'yi çeyrek geçiyor



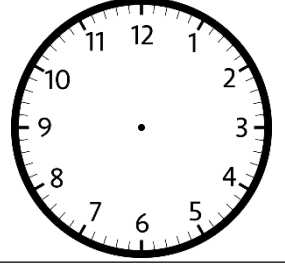
Saat 9 buçuk



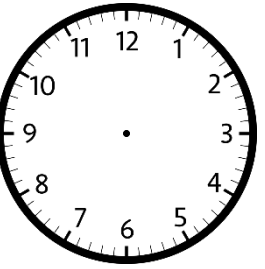
Saat 10'u çeyrek geçiyor



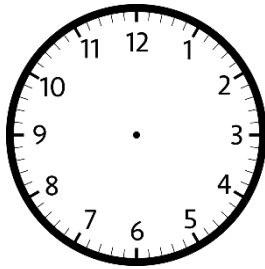
Saat 11'i çeyrek geçiyor



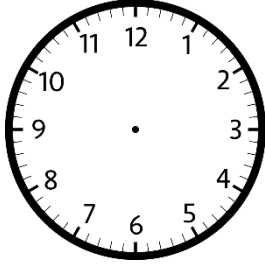
Saat 1'e çeyrek var



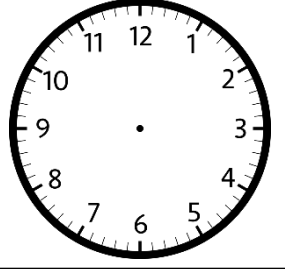
Saat 2'ye çeyrek var



Saat 7'yi çeyrek geçiyor

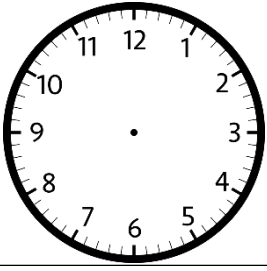


Saat 6'yı çeyrek geçiyor

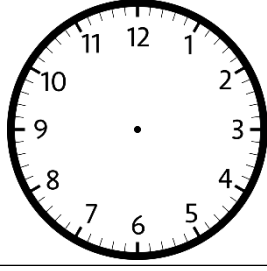


Saat 12'ye çeyrek var

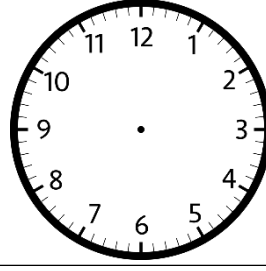
➤ Alt tarafta verilen saatlere göre akrep ve yelkovanları çiziniz.



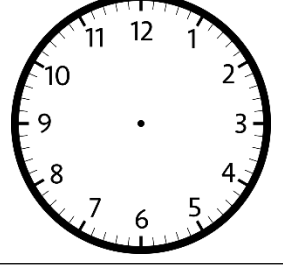
9 .30



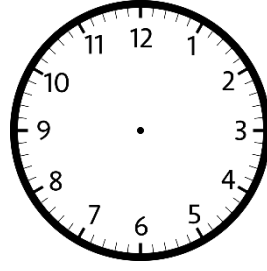
13 .15



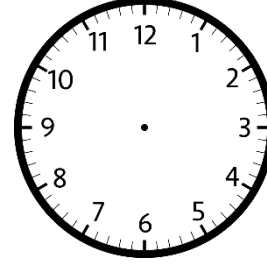
4 .45



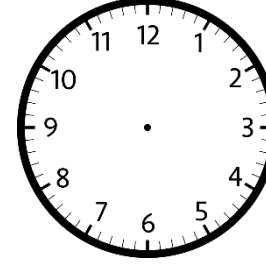
19 .30




12 .45



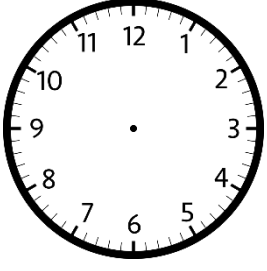
6 .15



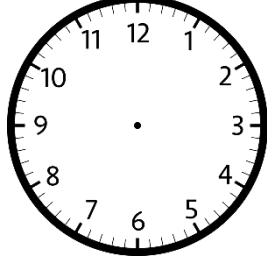
21 .45




10 .15



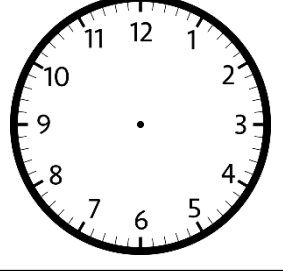
21 .30



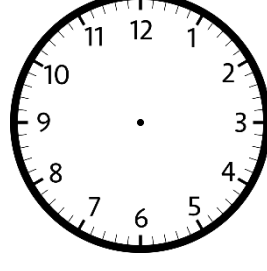
10 .45




19 .45




21 .15



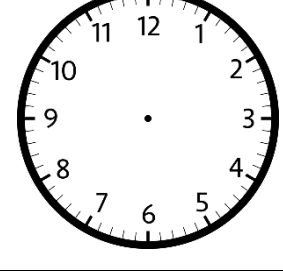
9 .45



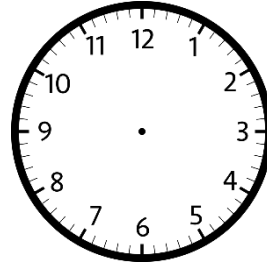
14 .30



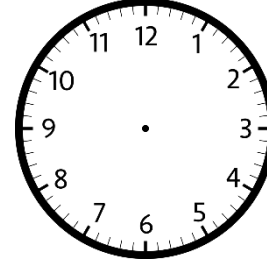
20 .15



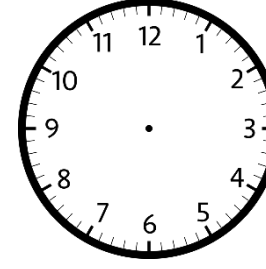
16 .45



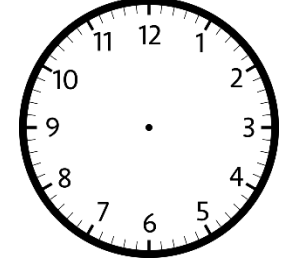
4 .15



17 .15



13 .45



3 .45

